

Name _____ Date _____

Grade 2

Unit 7 Review

1. Solve the number-grid puzzle.

55			

2. Solve the number-grid puzzle.

			30

3. Count up by 5s, starting at 40. Stop at 70.

Write the missing number.

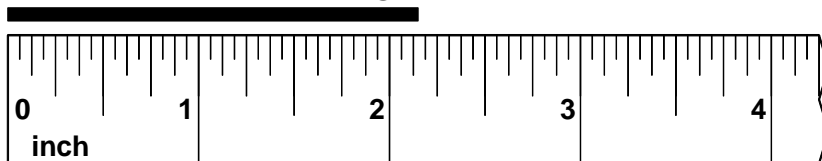
4. $4 + \underline{\quad\quad} = 10$

Write the missing number.

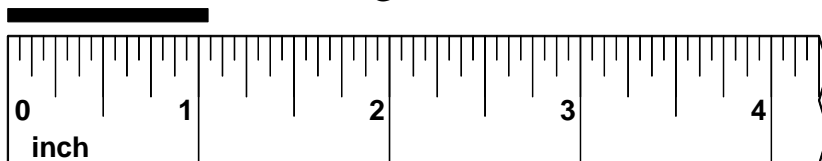
5. _____ + 3 = 60

6. _____ + 0 = 60

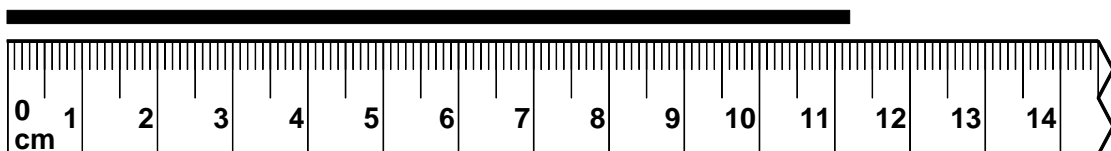
7. Measure the line segment to the nearest inch.



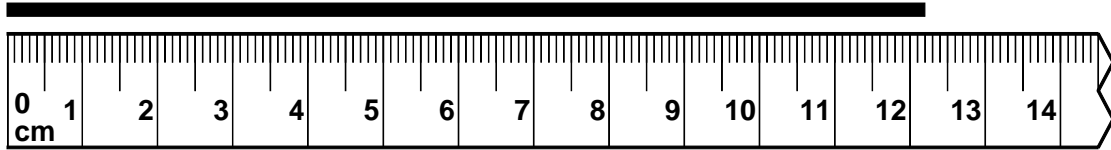
8. Measure the line segment to the nearest inch.



9. Measure the line to the nearest centimeter.



10. Measure the line to the nearest centimeter.



11. Write the missing number.

$$\underline{\hspace{2cm}} + 44 = 70$$

12. Write the missing number.

$$\underline{\hspace{2cm}} + 23 = 80$$

13. Write the sum.

$$68 + 69 + 54 = \underline{\hspace{2cm}}$$

14. Write the sum.

$$27 + 48 + 69 = \underline{\hspace{2cm}}$$

15. Find the median.

10, 3, 3, 8, 6, 9

16. Find the median.

15, 5, 7, 9, 11, 0